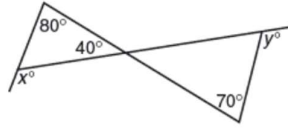




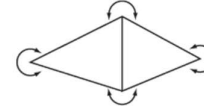
Student's Name: _____

Grade 9th

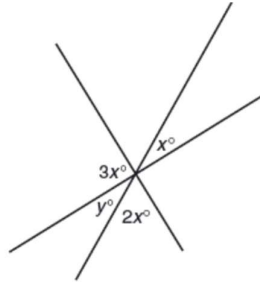
31st August, 2025



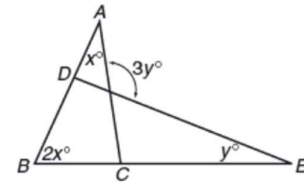
In the figure above, $x + y =$



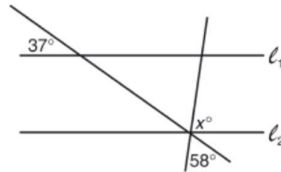
In the figure above, what is the sum of the degree measures of all of the angles marked?



In the figure above, what is the value of y ?



In the figure above, what is y in terms of x ?



In the figure above, if $\ell_1 \parallel \ell_2$, what is the value of x ?



In the figure above, if line segment AB is parallel to line segment CD , what is the value of y ?