

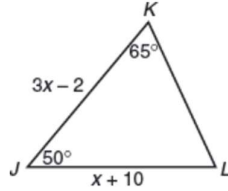


Student's Name: _____

Grade 9th

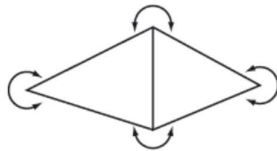
02nd September, 2025

Q1)




In $\triangle JKL$ above, what is the value of x ?

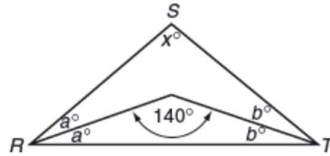
Q2)



In the figure above, what is the sum of the degree measures of all of the angles marked?



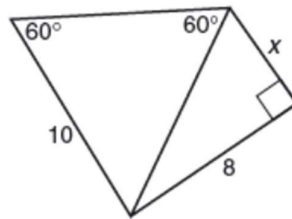
Q3)



Note: Figure not drawn to scale.

In $\triangle RST$ above, what is the value of x ?

Q4)



In the figure above, $x =$